

## पुस्तिका को तब तक न खोलें जब तक कहा न जाये

Roll No. :

प्रश्न पुस्तिका क्रमांक :

Question Booklet No. :

Course Name : **MBA**

बुकलेट सीरीज  
Booklet Series

OMR Sheet No. : -----

**B**

निर्धारित समय : 2 घण्टे

Time Allowed : 2 Hours

**AUPGCET-2024**

अधिकतम अंक : 100  
Maximum Marks : 100

प्रश्नों के उत्तर देने से पहले नीचे लिखे अनुदेशों को ध्यान से पढ़ लें।

Read the following instructions carefully before you begin to answer the questions.

### अभ्यर्थियों के लिए अनुदेश :

1. इस पुस्तिका में कुल 100 प्रश्न हैं।
2. सभी प्रश्न अनिवार्य हैं तथा सबके अंक समान हैं। गलत उत्तर के लिए ऋणात्मक मूल्यांकन नहीं होगा।
3. प्रश्नों के उत्तर देने से पहले आप इस पुस्तिका की जाँच करके देख लें कि इसमें पूरे पृष्ठ (कवर रहित) हैं तथा कोई पृष्ठ पूर्णरूपेण अथवा आंशिक रूप से छपा नहीं है। यदि आप इस पुस्तिका में कोई त्रुटि पाएँ तो तत्काल इसके बदले दूसरी प्रश्न पुस्तिका ले लें।
4. कक्ष निरीक्षक द्वारा आपको ओ.एम.आर. उत्तर पत्रक अलग से दिया जायेगा। प्रश्नों के उत्तर वास्तव में प्रारम्भ करने से पहले आप उत्तर पत्रक में निर्धारित स्थान पर अपना आवेदन संख्या, प्रश्न पुस्तिका क्रमांक, बुकलेट सीरीज तथा अन्य विवरण अवश्य भरें। ऐसा न करने पर आपके उत्तर पत्रक को जाँचा नहीं जायेगा और आपको शून्य अंक दे दिया जायेगा।
5. परीक्षा भवन छोड़ने से पहले अभ्यर्थी को ओ.एम.आर. उत्तर पत्रक और प्रश्न-पुस्तिका कक्ष निरीक्षक को जमा करना है।
6. अशुद्ध/गलत मुद्रित प्रश्न के लिए सबको उस प्रश्न के पूर्ण अंक प्रदान किये जायेंगे।
7. ओ.एम.आर. पत्रक में उत्तर अंकित करने की विधि तथा आवश्यक अनुदेश इस पुस्तिका के पीछे छपे हैं। उत्तर अंकित करने के लिए इन अनुदेशों को सावधानी पूर्वक पढ़ लें तथा उनका अनुपालन करें।
8. ऊपर के अनुदेशों में से किसी एक का भी अनुपालन न करने पर अभ्यर्थी की उत्तर पुस्तिका का मूल्यांकन नहीं किया जायेगा।

### Instructions for Candidates :

1. This Booklet contains 100 questions in all.
2. All questions are compulsory and carry equal marks. There won't be any negative marking for Wrong Answers.
3. Before you start answering the questions you must check up this Booklet and ensure that it contains all printed (without cover) pages and none of them is fully/partly blank. If you find any defect in this booklet, you must get it replaced immediately.
4. You will be supplied the OMR Answer Sheet separately by the invigilator. **You must complete the details of Application No., Test Booklet No., Booklet Series and other informations** before you actually start answering the questions, failing which your Answer Sheet shall not be evaluated and you will be awarded 'ZERO' mark.
5. Before leaving the examination hall candidates must submit the OMR answer sheet and question booklet to the Invigilator.
6. Every candidate will be awarded full marks for the corresponding Wrong/Misprint questions.
7. The manner/instruction to mark the OMR Answer Sheet has been printed at the back of this Booklet. Read it carefully and comply with.
8. In case of failure to comply with any of the above instructions the Answer Sheet of the candidate shall not be evaluated.

**DO NOT OPEN THE BOOKLET UNTIL YOU ARE TOLD TO DO SO**

Signature of the Candidate

Name of the Candidate

Date :

Signature of Invigilator

***Rough Work***

1. I ..... run for a long time.  
(A) can  
(B) need  
(C) dares  
(D) needs
2. He ..... not do it.  
(A) need  
(B) ought  
(C) used to  
(D) None of these
3. .... Success attends you!  
(A) May  
(B) Can  
(C) Could  
(D) Might
4. I ..... go to Delhi tomorrow.  
(A) shall  
(B) would  
(C) should  
(D) must
5. Choose the most appropriate option to change the narration (direct/indirect) of the given sentence. She said, "I bought a new flat."  
(A) She said that she had been bought a new flat  
(B) She said that she has bought a new flat  
(C) She said that she had bought a new flat  
(D) She said that she was bought a new flat
6. Choose the most appropriate option to change the voice (active/passive) form of the given sentence. He was watching T.V.  
(A) T. V must be watched by him.  
(B) T. V will be watched by him  
(C) T. V. should watch by him  
(D) T. V. was being watched by him
7. Choose the most appropriate option to change the voice (active/passive) form of the given sentence. He has challenged his friend.  
(A) His friend had been challenged by him.  
(B) His friend was being challenged by him.  
(C) His friend has been challenged by him.  
(D) His friend must be challenged by him.
8. Select the most appropriate idiom (in the context) to fill in the sentence.  
Many people \_\_\_\_\_ when they lost their job in the pandemic.  
(A) Bit the dust  
(B) Deckerd up  
(C) Out of the wood  
(D) Went to the moon

9. Export promotion is concerned with:
- (A) Globalization
  - (B) Privatization
  - (C) Liberalization
  - (D) None of these
10. Which of the following is not the component of economic environment?
- (A) Money supply in the economy
  - (B) Expansion of health facilities
  - (C) Volume of imports and exports of different items
  - (D) None of the above
11. Change in taxes is part of which environment of business.
- (A) Economic
  - (B) Political
  - (C) Legal
  - (D) None of these
12. In which production India attained self-sufficiency?
- (A) Fertilizers
  - (B) Edible oil
  - (C) Petroleum
  - (D) Food grains
13. Closed economy is one in which:
- (A) Only export takes place
  - (B) Neither exports nor imports take place
  - (C) Money supply is fully controlled
  - (D) Exchange rates are under a full control of the government
14. An economic unit transforms ----- -- into output.
- (A) Inputs
  - (B) Raw materials
  - (C) Money
  - (D) None of these
15. What people think of an organization's actions are called:
- (A) Public image
  - (B) Public visibility
  - (C) Viability
  - (D) Values
16. IRDA act is enacted in the year
- (A) 1991
  - (B) 1999
  - (C) 1990
  - (D) 2009
17. Low income economies are also called:
- (A) Third world
  - (B) Under developed nations
  - (C) Developing nations
  - (D) Second world
18. Marketing intermediaries are categorized under ----- environment:
- (A) External
  - (B) Macro
  - (C) Micro
  - (D) Remote

19. Which of the following countries per capita income is the highest:
- (A) India
  - (B) Bangladesh
  - (C) Thailand
  - (D) Pakistan
20. Which of the following items is not included in a country's balance of payments:
- (A) Shipping services
  - (B) Interest received from abroad
  - (C) Import and export duties
  - (D) Tourist's expenditure
21. A situation where a country exports a product at a price below its cost of production :
- (A) Full cost pricing
  - (B) New protectionism
  - (C) Dumping
  - (D) Price skimming
22. Which of the following is not a fundamental right enshrined in the Indian Constitution:
- (A) Right to freedom of religion
  - (B) Right to equality
  - (C) Right to equal pay for equal work for men as well as women
  - (D) Right to freedom of thought and expression
23. Expand MSME :
- (A) Medium, small and micro enterprises
  - (B) Micro, small and medium enterprises
  - (C) Minimum, small and medium enterprises
  - (D) None of these
24. Which of the three banks will be merged with the other two to create India's third-largest bank?
- (A) Punjab National Bank
  - (B) Indian Bank
  - (C) Bank of Baroda
  - (D) Dena Bank
25. What is the name of weak zone of the earth's crust?
- (A) Seismic
  - (B) Cosmic
  - (C) Formic
  - (D) Anaemic
26. Where was India's first national museum opened?
- (A) Delhi
  - (B) Hyderabad
  - (C) Rajasthan
  - (D) Mumbai

27. The world's nation 5G mobile network was launched by which country:
- (A) Japan  
(B) Asia  
(C) South Korea  
(D) Malaysia
28. The green planet in the solar system is?
- (A) Mars  
(B) Uranus  
(C) Venus  
(D) Earth
29. The father of Indian missile technology is \_\_\_\_\_?
- (A) Dr. Homi Bhabha  
(B) Dr. Chidambaram  
(C) Dr. A.P.J. Abdul Kalam  
(D) George Stephenson
30. Which of these is the small-scale industry in India?
- (A) Jute Industry  
(B) Paper Industry  
(C) Textile Industry  
(D) Handloom Industry
31. The largest public sector undertaking in the country is?
- (A) Railway  
(B) Airways  
(C) Roadways  
(D) Iron and Steel Plants
32. What is the name of the first Indian Woman who wins the man Booker prize.
- (A) Salman Khan  
(B) Arundhanti Roy  
(C) V. S. Naipaul  
(D) Kiran Desai
33. What is the reason behind the bats flying in the dark:
- (A) They produce high pitched sound called ultrasonic's  
(B) The light startles them  
(C) They have a perfect vision in the dark  
(D) None of these
34. Simplify  $(5+3) \times 4(5+3) \times 4(5+3) \times 4$ .
- (A) 32  
(B) 20  
(C) 24  
(D) 40

35. The roots of the quadratic equation  $x^2 - 7x + 10 = 0$  are:
- (A) 2 and 5
  - (B) 1 and 10
  - (C) -2 and -5
  - (D) 3 and 4
36. What is the probability of getting a tail when a fair coin is tossed?
- (A) 0
  - (B) 0.5
  - (C) 1
  - (D) 2
37. The area of a rectangle with a length of 10 cm and a width of 5 cm is:
- (A)  $50 \text{ cm}^2$
  - (B)  $25 \text{ cm}^2$
  - (C)  $15 \text{ cm}^2$
  - (D)  $30 \text{ cm}^2$
38. If  $a=4$  and  $b=5$ , what is  $a^2+b^2$ ?
- (A) 41
  - (B) 45
  - (C) 29
  - (D) 16
39. What is the value of  $\cos(0^\circ)$ ?
- (A) 0
  - (B) 1
  - (C) -1
  - (D) 0.5
40. What is the value of  $30 \div 5 \times 3$ ?
- (A) 2
  - (B) 18
  - (C) 9
  - (D) 15
41. 15% of 200 is:
- (A) 30
  - (B) 25
  - (C) 40
  - (D) 35
42. Solve for  $x$  :  $3x+5=20$
- (A) 5
  - (B) 6
  - (C) 4
  - (D) 3
43. The ratio of 9 to 12 is:
- (A) 3:4
  - (B) 4:3
  - (C) 1:2
  - (D) 2:3

44. What is the simple interest on Rs. 2000 at 5% per annum for 2 years?
- (A) Rs. 200  
(B) Rs. 250  
(C) Rs. 100  
(D) Rs. 300
45. If A can complete a task in 6 days and B can complete the same task in 8 days, how long will it take for them to complete it together?
- (A) 3.4 days  
(B) 3.6 days  
(C) 4 days  
(D) 4.5 days
46. If a car travel 240 km in 4 hours, what is its average speed?
- (A) 40 km/h  
(B) 50 km/h  
(C) 60 km/h  
(D) 70 km/h
47. The HCF of 24 and 36 is:
- (A) 6  
(B) 12  
(C) 18  
(D) 24
48. What is  $2^3 \times 2^2$ ?
- (A) 10  
(B) 16  
(C) 8  
(D) 32
49. What is  $2/3 + 1/4$  ?
- (A)  $8/12$   
(B)  $11/12$   
(C)  $3/7$   
(D)  $5/12$
50. What is 0.75 as a fraction?
- (A)  $3/4$   
(B)  $1/4$   
(C)  $7/10$   
(D)  $3/5$
51. The perimeter of a square with side length 6 cm is:
- (A) 24 cm  
(B) 18 cm  
(C) 30 cm  
(D) 36 cm
52. The volume of a cube with side length 3 cm is:
- (A)  $9 \text{ cm}^3$   
(B)  $18 \text{ cm}^3$   
(C)  $27 \text{ cm}^3$   
(D)  $36 \text{ cm}^3$



53. The sum of the angles in a triangle is:
- (A)  $90^{\circ}$
  - (B)  $180^{\circ}$
  - (C)  $360^{\circ}$
  - (D)  $270^{\circ}$
54. The surface area of a cube with side length 4 cm is:
- (A)  $24 \text{ cm}^2$
  - (B)  $48 \text{ cm}^2$
  - (C)  $64 \text{ cm}^2$
  - (D)  $96 \text{ cm}^2$
55. What is the distance between the points (2, 3) and (5, 7)?
- (A) 5
  - (B) 4
  - (C) 3
  - (D) 6
56. What is  $\log_{10}(100)$ ?
- (A) 2
  - (B) 10
  - (C) 1
  - (D) 0
57. What is the 5th term of the arithmetic sequence 2, 5, 8, 11, .....?
- (A) 14
  - (B) 15
  - (C) 16
  - (D) 17
58. If  $A = \{1, 2, 3\}$  and  $B = \{2, 3, 4\}$ , what is  $A \cap B$ ?
- (A)  $\{1, 4\}$
  - (B)  $\{2, 3\}$
  - (C)  $\{1, 2, 3, 4\}$
  - (D)  $\{ \}$
59. Which of the following is not a type of logical reasoning?
- (A) Deductive reasoning
  - (B) Inductive reasoning
  - (C) Abductive reasoning
  - (D) Reciprocal reasoning
60. If all A are B, and all B are C, then :
- (A) All A are C
  - (B) All C are A
  - (C) Some A are C
  - (D) No conclusion can be drawn

61. Complete the series : 2, 5, 10, 17, 26 \_\_\_\_\_.
- (A) 35  
(B) 36  
(C) 37  
(D) 38
62. In a certain code language, 'POND' is written as 'ROPE'. How will 'FOOT' be written in that code?
- (A) GPQU  
(B) GPRU  
(C) GQPU  
(D) GPUR
63. If 3 cats can catch 3 mice in 3 minutes, how many cats are needed to catch 100 mice in 100 minutes?
- (A) 1  
(B) 10  
(C) 100  
(D) 1000
64. Find the odd one out : Apple, Orange, Banana, Pear, Tomato
- (A) Orange  
(B) Tomato  
(C) Pear  
(D) Banana
65. If ZEBRA is written as 2652181, how will LION be written?
- (A) 12452  
(B) 1262  
(C) 1521  
(D) 1542
66. A is 6 km West from B, And C is 4 km North from B. D is 12 km South from C. Now D in which direction and how far from A.
- (A) 13 km  
(B) 12 km  
(C) 15 km  
(D) 10 km
67. If January 1, 2023 is a Sunday, what day of the week is January 1, 2024?
- (A) Monday  
(B) Tuesday  
(C) Wednesday  
(D) Thursday
68. A car travels 40 km in 1 hour with a constant speed. How long will it take to travel 160 km?
- (A) 1 hour  
(B) 2 hours  
(C) 3 hours  
(D) 4 hours

69. If 5 friends shake hands with each other, how many handshakes occur?
- (A) 5  
(B) 10  
(C) 15  
(D) 20
70. Complete the analogy : Book is to Reading as Fork is to \_\_\_\_\_.
- (A) Eating  
(B) Writing  
(C) Stirring  
(D) Typing
71. Arrange the following words in alphabetical order : Elephant, Lion, Giraffe, Zebra, Monkey.
- (A) Elephant, Giraffe, Lion, Monkey, Zebra  
(B) Giraffe, Elephant, Lion, Monkey, Zebra  
(C) Elephant, Giraffe, Lion, Zebra, Monkey  
(D) Elephant, Giraffe, Lion, Monkey, Zebra
72. If A is the brother of B; B is the sister of C; and C is the father of D, then how is D related to A?
- (A) Brother  
(B) Sister  
(C) Nephew  
(D) Niece
73. Which number should come next in the series? 1, 2, 4, 7, 11, \_\_\_\_\_
- (A) 15  
(B) 16  
(C) 17  
(D) 18
74. If all roses are flowers, and some flowers fade quickly, then:
- (A) All roses fade quickly  
(B) Some roses fade quickly  
(C) No roses fade quickly  
(D) None of the above
75. If orange is to fruit, as carrot is to \_\_\_\_\_.
- (A) Vegetable  
(B) Salad  
(C) Root  
(D) Leaf

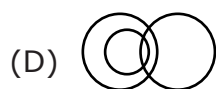
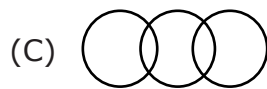
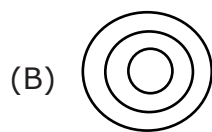
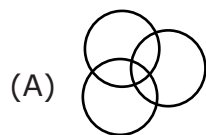
76. If 6 children consume 12 apples in 4 days, how many apples will 8 children consume in 6 days?

- (A) 16
- (B) 18
- (C) 24
- (D) 36

77. Find the missing number in the sequence : 2, 3, 5, 8, 12, \_\_\_\_\_

- (A) 16
- (B) 18
- (C) 20
- (D) 21

78. Which of the following figures represent females, mothers doctors?



79. A train travels 100 km in 2 hours. What is its speed in km/hr?

- (A) 50
- (B) 60
- (C) 70
- (D) 80

80. Pointing to a photograph, a person said, "I have no brother or sister but that man's father is my father's son." Who is the man in the photograph?

- (A) Son
- (B) Father
- (C) Brother
- (D) Himself

81. If 3 pencils cost Rs. 12, how much will 5 pencils cost?

- (A) ₹ 15
- (B) ₹ 18
- (C) ₹ 20
- (D) ₹ 25

82. Choose the option that is related to the third term in the same way as the first two terms are related :

4:16 :: 5 : \_\_\_\_\_

- (A) 20
- (B) 21
- (C) 22
- (D) 25

83. If CAT is coded as 3, DOG as 7, and FISH as 5, then how will BIRD be coded?
- (A) 4  
(B) 5  
(C) 6  
(D) 7
84. She sings \_\_\_\_\_ beautifully that everyone enjoys her performances.
- (A) so  
(B) too  
(C) such  
(D) very
85. We've known each other \_\_\_\_\_ we were children.
- (A) since  
(B) for  
(C) from  
(D) during
86. I can't believe \_\_\_\_\_ my keys at home.
- (A) I forget  
(B) I forgot  
(C) I have forgotten  
(D) I've foget
87. The cake tasted \_\_\_\_\_ sweet that I couldn't finish it.
- (A) so  
(B) such  
(C) very  
(D) too
88. I couldn't find my keys \_\_\_\_\_ I left them on the kitchen counter.
- (A) because  
(B) so  
(C) but  
(D) or
89. I'll call you \_\_\_\_\_ I arrive at the airport.
- (A) while  
(B) when  
(C) since  
(D) during
90. \_\_\_\_\_ he studied hard, he couldn't pass the exam.
- (A) Although  
(B) Because  
(C) So  
(D) Since

91. I don't like coffee, \_\_\_\_\_ tea.  
 (A) or  
 (B) and  
 (C) but  
 (D) so
92. I'm interested \_\_\_\_\_ learning a new language.  
 (A) on  
 (B) at  
 (C) in  
 (D) with
93. The concert was canceled \_\_\_\_\_ the heavy rain.  
 (A) due to  
 (B) because  
 (C) because of  
 (D) owing to
94. The meeting will start \_\_\_\_\_ 2:00 PM \_\_\_\_\_ 3:00 PM.  
 (A) from, until  
 (B) at, to  
 (C) between, and  
 (D) at, until
95. Select correct word -  
 (A) Aceleration  
 (B) Aceeleration  
 (C) Acceleration  
 (D) Acceleration
96. Jawaharlal spends his childhood \_\_\_\_\_ Anand Bhawan.  
 (A) at  
 (B) in  
 (C) on  
 (D) across
97. In the following questions, find the correctly spelt word:  
 (A) Recommandation  
 (B) Recommendation  
 (C) Recomendations  
 (D) Reccomendation
98. He ..... have a holiday tomorrow. (Promise).  
 (A) will  
 (B) shall  
 (C) could  
 (D) should
99. Children ..... obey their parents.  
 (A) can  
 (B) could  
 (C) should  
 (D) shall
100. She ..... do this work.  
 (A) have  
 (B) can  
 (C) has  
 (D) None of these

***Rough Work***

**ओ.एम.आर. पत्रक में उत्तर अंकित करने के लिए  
आवश्यक अनुदेश**

1. यथा सम्भव केवल काले/नीले बॉल प्वाइंट पेन का प्रयोग करें।
2. गोले को अत्यधिक सावधानी पूर्वक काला/नीला करें क्योंकि बाद में सुधार करना सम्भव नहीं है।
3. प्रत्येक वस्तुनिष्ठ प्रश्न के बाद चार उत्तर विकल्प (A), (B), (C) तथा (D) दिये गये हैं। प्रत्येक दशा में उनमें से एक विकल्प ही उस प्रश्न का सही उत्तर होगा। इनमें से सही उत्तर-विकल्प चुनकर ओ.एम.आर.पत्रक में सम्बन्धित प्रश्न संख्या के सामने वाले सही गोल खाने को बॉल प्वाइंट पेन से काला/नीला किया जायेगा।
4. यदि आप ओ.एम.आर. उत्तर-पत्रक में किसी प्रश्न के सामने एक से अधिक गोलाकार खाने भरेंगे तो आपका उत्तर गलत माना जायेगा।
5. ओ.एम.आर. उत्तर-पत्रक में वस्तुनिष्ठ के उत्तरों के अलावा अन्य सभी वांछित विवरण भी आवश्यक रूप से भरे जाने हैं। इसके लिये उपयुक्त गोलों को काला/नीला करें।
6. यदि दिये गये निर्देशानुसार आप अपेक्षित गोलों को काला/नीला नहीं करते हैं तो आपके उत्तर-पत्रक का मूल्यांकन नहीं किया जायेगा।
7. ओ.एम.आर. पत्रक को कहीं से भी न मोड़ें और न ही निर्धारित स्थान के अतिरिक्त किसी भी अन्य स्थान पर कोई भी निशान लगायें अन्यथा आपके उत्तर-पत्रक की जाँच सम्भव नहीं होगी।
8. निर्धारित स्थानों के अलावा अन्यत्र किसी स्थान पर न तो कोई निशान लगायें और न ही अनुक्रमांक या नाम लिखें, अन्यथा आपकी प्रवेश परीक्षा निरस्त कर दी जायेगी।
9. ओ.एम.आर. उत्तर-पत्रक में वस्तुनिष्ठ प्रश्नों के उत्तर देने के लिये गोलाकार खाने को सही-सही भरने की विधि निम्न प्रदर्शित उदाहरण के अनुसार होगी:

सही तरीका : (A) ● (C) (D)

**INSTRUCTIONS FOR MARKING THE  
ANSWERS IN THE OMR ANSWER SHEET**

1. Preferably use Black/Blue Ball Point Pen.
2. Darken the circle very carefully, because there is no scope for rectification afterwards.
3. Each objective type question has 4 (four) alternatives (A), (B), (C) and (D). In any case one and only one alternative will be the correct answer. Choose the right alternative and darken the appropriate circle in the OMR answer sheet in front of the related question.
4. If you darken more than one circle in front of any question in your OMR Sheet, your answer will be treated as wrong.
5. In OMR answer sheet you must fill up all other required informations and for this you must darken the appropriate circle. Do this very carefully.
6. Your answer sheet will not be evaluated if you fail to fill up the required circles correctly as per given directions.
7. Do not fold OMR answer sheet and do not make any stray marks on it, otherwise it won't be possible to evaluate it.
8. Do not make any stray mark and do not write your roll number or name except in the space provided for the purpose, otherwise your examination will be cancelled.
9. The right method to darken the circle to answer the objective type questions in OMR sheet is as shown below :

Right method : (A) ● (C) (D)